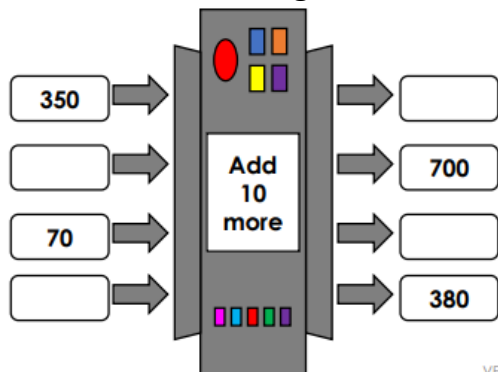
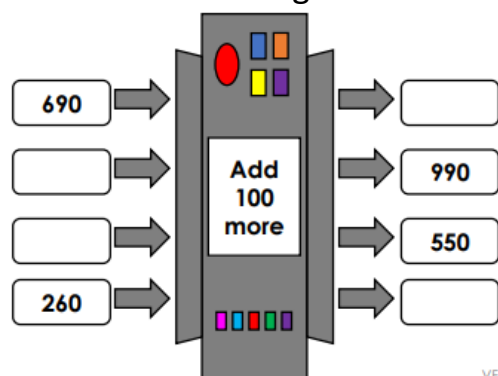


TRY IT 1 – 1, 10, 100 more or less

1. Write the missing numbers.



2. Write the missing numbers.



3. What is 1 less than 369?

4. What is 100 less than 810?

5. Write this number and then write the number 10 more.

| H | T | O |
|------|--------|--------|
| ●●●● | ●●●●●● | ●●●●●● |
| ●●●● | ●●●● | ●●●●●● |

6. What is 10 more than 320?

7. What is 1 less than 781?

8. What is 100 more than 820?

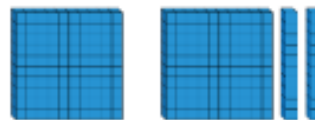
9. What is 10 less than 940?

10. What is 1 more than 949?

11. What is 100 less than 900?

TRY IT 2 – 1, 10, 100 more or less

1. Find the number.



10 less 10 more

2. Find the number.



3. Write the numbers 10 more and 10 less than these numbers.

550

724

302



4. Stick in the table and complete it.

5. Stick in the sequence and then cut out the cards and stick them in the correct places.




APPLY IT – 1, 10, 100

more or less




1. A counter is missing. What could the number be?

| Hundreds | Tens | Ones |
|---|------|---|
|  | |  |

2. Write this number and then write the number 10 more.

| H | T | O |
|---|---|---|
|  |  |  |

3. Write this number and then write the number 1 more.

| H | T | O |
|---|---|---|
|  |  |  |

4. Stick in the sequence and then cut out the cards and stick them in the correct places.

5. Joe had some £1, 10p and 1p coins. He dropped two of them in a muddy puddle. How much money could he have had in his pocket?



DEEPEN IT – 1, 10, 100

more or less

1.

10 more than my number is the same as 100 less than 320

What is my number?

Explain how you know.

Write your own similar problem to describe the original number.

2.

I think of a number, add ten, subtract one hundred and then add one.

My answer is 256

What number did I start with?

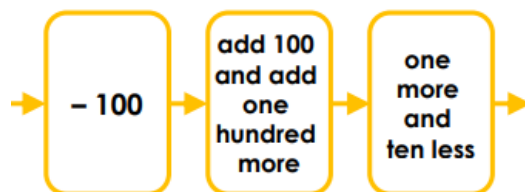
Explain how you know.

What can you do to check?

3. The number 471 comes out of this function machine. What number went in?



4. The number 600 comes out of this function machine. What number went in?



| 100 less | Number | 100 more |
|----------|--------|----------|
| | | |
| | | |

