

TRY IT 1 – TELLING THE TIME TO 5 MINUTES

1. Copy and complete these sentences with the correct word - **hour** or **minute**.

On a clock, the longer hand is the _____ hand.

On a clock, the shorter hand is the _____ hand.

- Where will the hour hand be at 9 o'clock?
- Where will the minute hand be at half past 2?
- Match the clocks to the correct times.



Half past 6

6 o'clock

Half past 5




Half past 6


6 o'clock

Half past 5

5. What times do these clocks show?




6. Draw the missing hand on this clock so that it shows 2 o'clock.



TRY IT 2 – TELLING THE TIME TO 5 MINUTES 1.

1. Draw the missing hand on this clock so that it shows half past 3.



2.



It is 6 past 8.

Is Jason correct? How do you know?

3.



It's 6 o'clock.




Is Millie right? How do you know?

4. If the minute hand is pointing at 3, how many minutes have passed the hour?

5. If the minute hand is pointing at 9, how many minutes until the next hour?

6. What times do these clocks show?



TRY IT 3 – TELLING THE TIME TO 5 MINUTES

1. Match the clocks to the correct times.



Quarter past 4

Quarter past 5

Quarter past 6


Quarter to 12

Quarter past 11

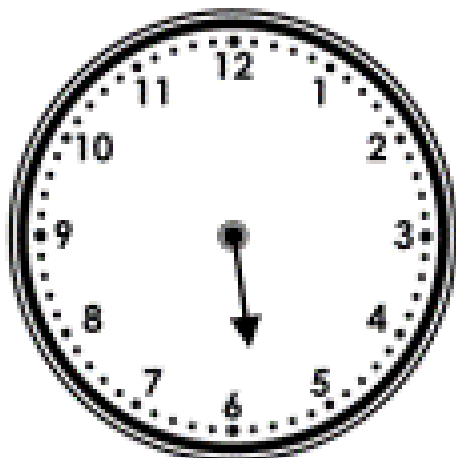
Quarter past 12



2. Draw the missing hand on this clock so that it shows quarter past 3.



3. Draw the missing hand on this clock so that it shows quarter to 6.



4. What will the time be 15 minutes after quarter past 10?

TRY IT 4 – TELLING THE TIME TO 5 MINUTES

1.



It's 9 o'clock.



Is Nia right? How do you know?

2.




In quarter of an hour it will be 4 o'clock.

Is Dan right? How do you know?

3. Playtime begins at half past 10.



On this clock, draw where the minute hand would be 15 minutes later.




TRY IT 5 – TELLING THE TIME TO 5 MINUTES

1. How many minutes are there between each pair of numbers on a clock?
2. How do we know whether it is a 'past' or a 'to' time?
3. Write the next three rows of this table. What do you notice?

Minute hand pointing to	Minutes past the hour
1	5
2	10
3	15

4. True or false?
This clock shows the time 5 past 3.



4. True or false?
This clock shows the time 10 to 2.




TRY IT 6 – TELLING THE TIME TO 5 MINUTES

1. Write the times.

a) b)




c) d)



2. Draw this time on the clock.


10 to 7



TRY IT 7 – TELLING THE TIME TO 5 MINUTES

1. Draw this time on the clock.

25 past 6



2. What is the time 10 minutes after the time shown?



3.




I finished swimming at 20 to 3 so the minute hand was on the 9.

Is she correct?

Explain why.

4. Jed starts reading at half past 1. He reads for 5 minutes. At what time does he stop reading?



TRY IT 8 – TELLING THE TIME TO 5 MINUTES

1. Is he correct? Explain why.



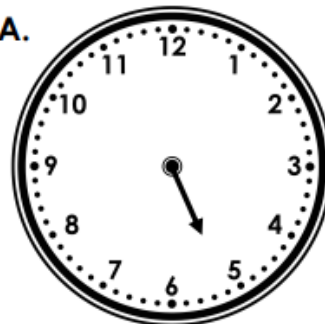
I got on the bus at 10 past 8. When I got off the bus it was 25 to 9, so the minute hand was on the 5.

2. Tianna goes swimming at 20 to 5. She swims for 10 minutes. What time does she stop swimming?




3. Draw the minute hands on the clocks to tell the correct times.

A.



20 past 5


B.




10 past 9

TRY IT 9 – TELLING THE TIME TO 5 MINUTES


1. Draw the hands on the clock to show the time 25 minutes to 6.



2. Draw the hands on the clock to show the time 25 minutes past 6.




3. Draw the hands on the clock to show the time 20 minutes to 8.



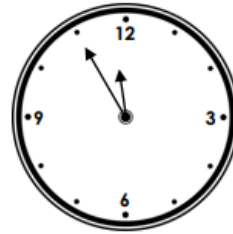
TRY IT 10 – TELLING THE TIME TO 5 MINUTES

1. What time is shown on these clocks?


a)



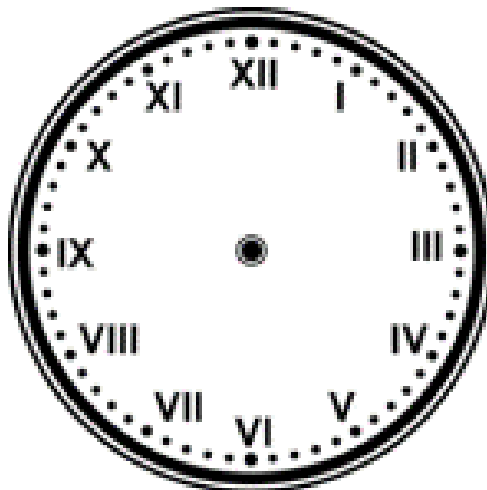
b)



2. Draw the hands on the clock to show the time 10 to 2.

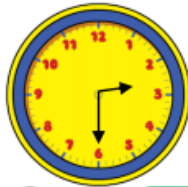


3. Draw the hands on the clock to show the time 5 to 10.



APPLY IT 1 – TELLING THE TIME TO 5 MINUTES

1.



Who is telling the time correctly?



The time is half past 6

Dora

The time is half past 3



Amir



The time is half past 2

Alex

Can you spot the mistakes they've made?

2.

It is half past 11 so the hour hand should be on the 11

Is Alex correct?

Explain your reasoning.

3.



Oh no! The minute hand has fallen off the classroom clock!

Lunchtime is at 12:00

Have the children missed their lunchtime?

APPLY IT 2 – TELLING THE TIME TO 5 MINUTES

1.



Quarter past is always later than quarter to.

Do you agree with Teddy?
Explain why.

2.

How many quarters of an hour are between 7 o'clock and 9 o'clock.



Explain how you found the answer.

3.

The train to Blackpool leaves at quarter past and quarter to every hour.

Make a list of the times of the trains

Oliver can catch if he gets to the train station between 2 o'clock and half past 4



4.



It is ten to one.

Dora

It is ten past ten.



Amir



It is ten to two.

Alex

Who is correct? Explain your answer.

APPLY IT 3 – TELLING THE TIME TO 5 MINUTES

1.



Four lots of 5 minutes is the same as quarter of an hour.

Do you agree with Rosie? Explain why.

2.

Sophia starts her Maths questions at 10 past 11



Each question takes her 5 minutes to complete.
She completes 7 questions.

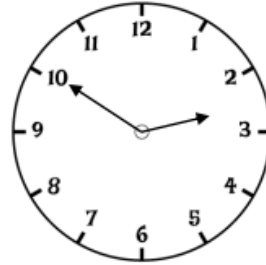
What time does Sophia finish her Maths questions?
Explain how you found the answer.

3.

Do we ever say “45 minutes to” the hour? Explain your reasoning.

APPLY IT 4 – TELLING THE TIME TO 5 MINUTES

1.



The clock shows ten minutes to 3

Dora

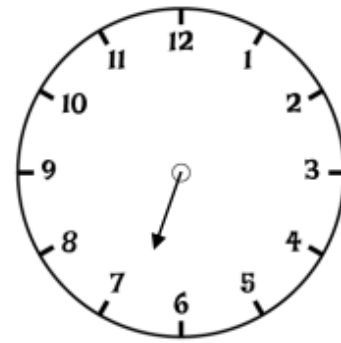
The hour hand is not quite pointing to the 3, so it must be ten to 2



Amir

Who do you agree with?
Explain your thinking.

2.



This clock has lost its minute hand.

What time could it be?
Justify your answer.